



Center for Academic Resources in Engineering (CARE) Peer Exam Review Session

Math 241 – Calculus III

Midterm 3 Worksheet

The problems in this review are designed to help prepare you for your upcoming exam. Questions pertain to material covered in the course and are intended to reflect the topics likely to appear in the exam. Keep in mind that this worksheet was created by CARE tutors, and while it is thorough, it is not comprehensive. In addition to exam review sessions, CARE also hosts regularly scheduled tutoring hours.

Tutors are available to answer questions, review problems, and help you feel prepared for your exam during these times:

Session 1: Fri, 11/15 4:00-5:30 pm Gabe, Cami in CIF 3025

Session 2: Sat, 11/16 4:00 - 5:30 pm Kewal, Pallab in CIF 3025

Session 3: Sun, 11/17 5:00 - 6:30 pm Rose, Pallab in CIF 3025

Can't make it to a session? Here's our schedule by course:

<https://care.grainger.illinois.edu/tutoring/schedule-by-subject>

Solutions will be available on our website after the last review session that we host.

Step-by-step login for exam review session:

1. Log into Queue @ Illinois: <https://queue.illinois.edu/q/queue/845>
2. Click “New Question”
3. Add your NetID and Name
4. Press “Add to Queue”

Please be sure to follow the above steps to add yourself to the Queue.

Good luck with your exam!

1. Compute the double integral over the indicated rectangle. Confirm your answer by switching the order of integration and recomputing.

$$\iint_R 2x - 4y^3 \, dA \quad R = [-5, 4] \times [0, 3]$$

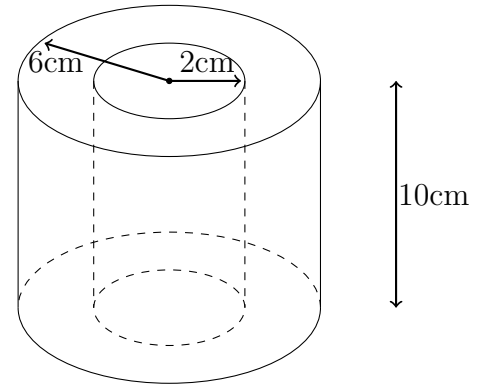
2. Making an appropriate change of variables, compute the following double integral over the region bound by a circle of radius 2 and a circle of radius 5.

$$\iint_D e^{x^2+y^2} \, dA$$

3. A toilet paper manufacturing company has increased their production. Unfortunately, this production increase has caused a major manufacturing error! As you move towards the center of any one toilet paper roll, the sheets get progressively more dense. The density of a toilet paper roll can be modeled using the following function:

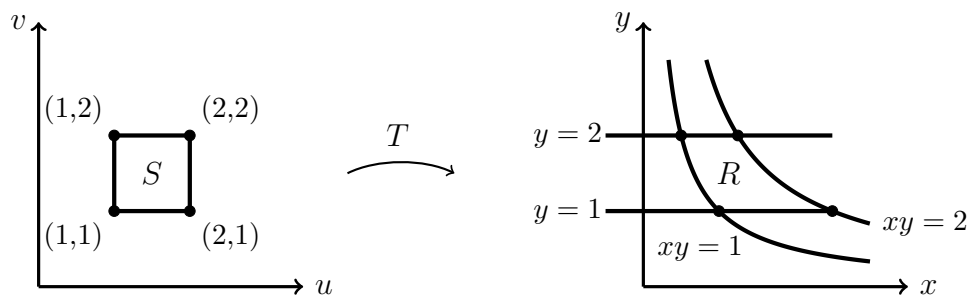
$$\rho(r) = \cos\left(\frac{\pi(r-1)}{6}\right) + 1$$

r is the radial distance away from the center of the roll (inside the center cardboard tube). The whole roll can be modeled as a cylinder with an outer radius of 6, and inner radius of 2 (the cardboard tube radius), and a height of 10.



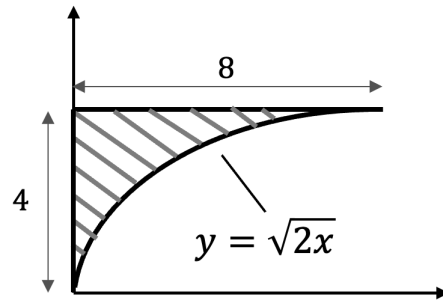
- (a) Without using a calculator, calculate the mass of the toilet paper roll if the density everywhere was just 1 (leave π in your answer)
- (b) Set up the triple integral to solve for the mass of a toilet paper roll. Neglect the weight of the inner cardboard tube for your calculation.
- (c) Without using a calculator, solve the integral (leave π in your answer)

4. Consider the region R :



- (a) Suppose there exists a transformation $S: \mathbb{R}^2 \rightarrow \mathbb{R}^2$ from S to R . Find $T(u, v)$
- (b) Use the answer from (a) to evaluate $\iint_R x^2 dA$

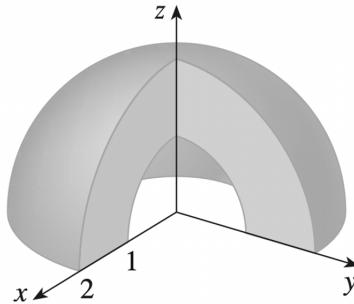
5. What is the x -coordinate of the center of mass for the shaded region if it has a density function $\rho(x, y) = 3x + 2y$? (Solve the integral by hand then evaluate the final expression with a calculator.)



6. Find the surface area of $z = \frac{x^2+y^2}{2}$ that lies within the cylinder $x^2 + y^2 = 4$. (Evaluate the integral by hand.)

7. Set up the triple integral of the function $f(x, y)$ using spherical coordinate over the solid shown below.

$$f(x, y) = \frac{x^2 + y^2}{z^2}$$



8. Using cylindrical coordinate to set up the integral to calculate the mass of a solid that is enclosed by both the cone $z = \sqrt{x^2 + y^2}$ and the sphere $x^2 + y^2 + z^2 = 8$. The density of the solid is modeled by $f(x, y, z) = \arctan(y/x)$.

9. Evaluate $\iint_R 6x - 3y dA$ where R is the parallelogram with vertices $(2, 0)$, $(5, 3)$, $(6, 7)$, and $(3, 4)$ using the transformation $x = \frac{v-u}{3}$ and $y = \frac{4v-u}{3}$.