

Name: _____

DISC: _____

Score: ____ / 20

Instructions:

- Do your own work.
- Answer the questions below in the space provided.
- Make sure you show all your work and any equations that you use.
- Please place a box around your answers.
- Remember to give the correct units with all numerical answers

Q1

Q2

Q3

Q4

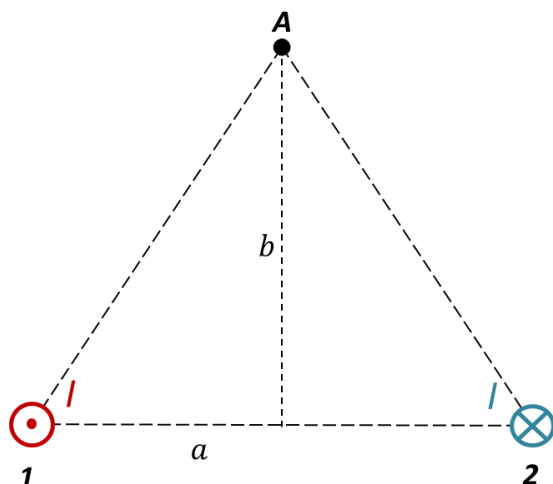
10

5

5

5

1. Consider the two parallel wires shown in the diagram below. Each wire carries the same current I



B from a wire	$B = \frac{\mu_0 I}{2 \pi r}$
FORCE	$F = IBL$
MAGNETIC FLUX	$\Phi = BA \cos \phi$
For Problem 1	
a	0.3 m
b	0.6 m
I	0.3 A
μ_0	$4\pi \times 10^{-7} \text{ T m/A}$
Useful Information for All Problems	

Direction 1 (2 pts):

- a. At point **A** draw and label the direction of the magnetic field *from wire 1* on the diagram.

Direction 2(2 pts):

- b. At point **A** draw and label the direction of the magnetic field *from wire 2* on the diagram.

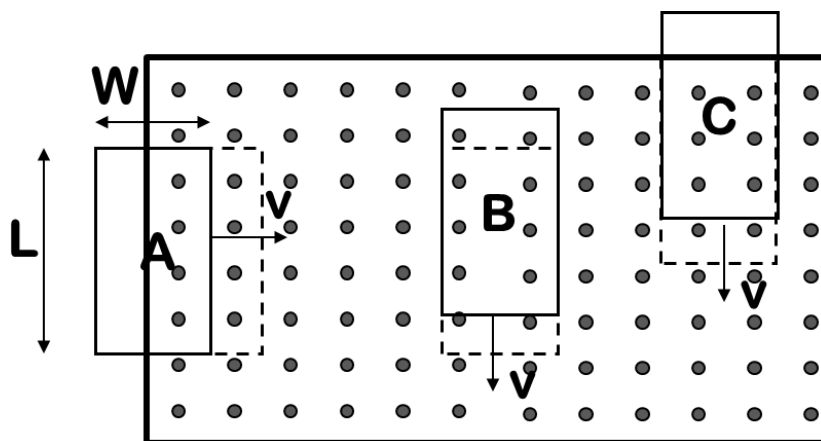
Direction 2(2 pts):

- c. At point **A** draw and label the direction of the *total magnetic field* on the diagram.

Magnetic field (4 pts):

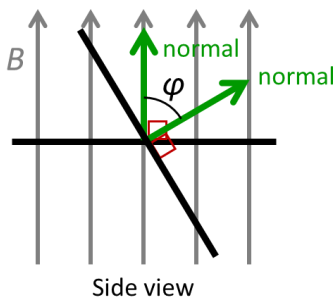
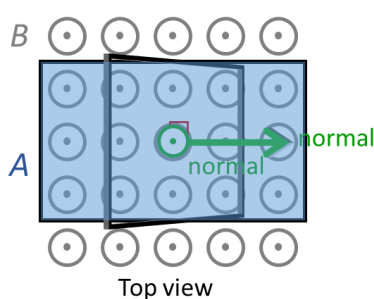
- d. Calculate the *total magnetic field* at point **A**. *Show all of your work.*

2. Each current loop moves through a magnetic field as shown. Which loop experiences the greatest induced EMF and why?



Choice &
Explanation (5 pts):

3. A loop starts at $t = 0$ s with its normal parallel to a constant magnetic field and rotates with constant angular velocity as shown in the diagram:



	For Problem 2
Angular Velocity	$\omega = 3 \text{ rad/s}$
Area	$A = 0.02 \text{ m}^2$
Field	$B = 0.07 \text{ T}$
Radians to Degrees	$180^\circ = \pi$

Initial Flux (1 pts):

- a. What is the flux through the loop just before the loop starts to rotate?

Final Flux (1 pts):

- b. What is the flux through the loop at $t = 0.5$ s?

Angle (1 pts):

- c. At what angle is the normal pointed at $t = 0.5$ s?

Current direction: (2 pts):

- d. As viewed from the top, in what direction does the current flow at $t = 0.5$ s? Choose one of the options below and explain your answer.
- Clockwise
 - Counter-clockwise
 - No Current Flows

This page intentionally left blank